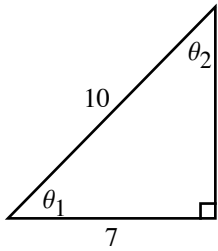


Trigonometry Assignment #6

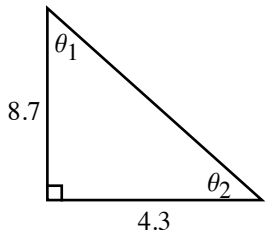
Covers up to Trigonometry 26: Inverse Functions: Arctangent

1. Using a calculator, find the missing angles (to at least 3 decimal places of accuracy)

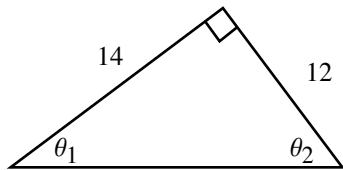
a.



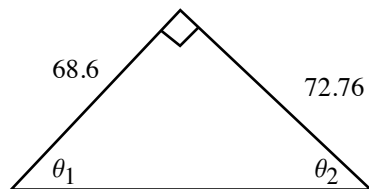
b.



c.

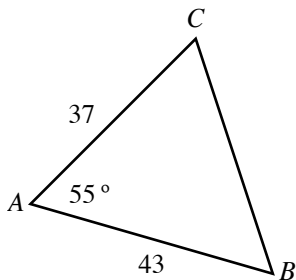


d.

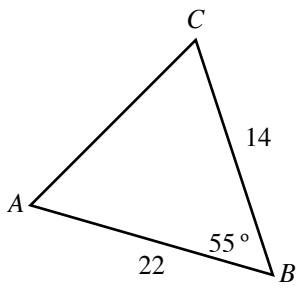


2. Using a calculator, find the missing angles (to at least 3 decimal places of accuracy). Be sure to re-use your solutions to Assignment #5 to find the missing side lengths.

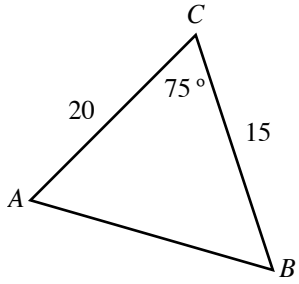
a.



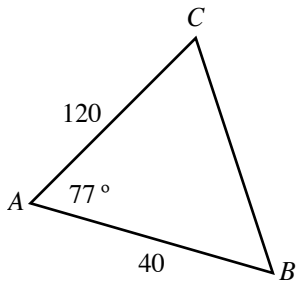
b.



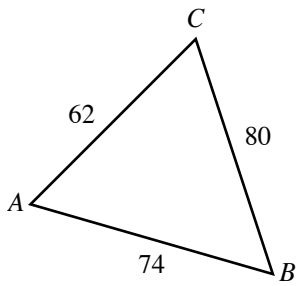
c.



d.



e.



f.

